

**3rd Math 4.2b**

Name: \_\_\_\_\_

Class: \_\_\_\_\_

Date: \_\_\_\_\_

1. Put the glasses in order from longest to shortest.




A.



B.



C.



D.



2. Put the items in order from tallest to shortest.



gift



ice cream



cup



apple

- A. ice cream, gift, cup, apple  
 B. apple, cup, gift, ice cream  
 C. ice cream, cup, apple, gift  
 D. gift, apple, cup, ice cream

3. Put the objects in order from shortest to longest.



dog



flower



butterfly



fish

- A. dog, fish, flower, butterfly  
B. butterfly, flower, fish, dog  
C. dog, fish, butterfly, flower  
D. flower, butterfly, fish, dog
4. Put the objects in order from shortest to tallest.



oval



triangle



square



star

- A. triangle, oval, square, star  
B. star, square, oval, triangle  
C. square, star, triangle, oval  
D. oval, triangle, star, square

5. Put the objects in order from shortest to tallest.



A.



B.



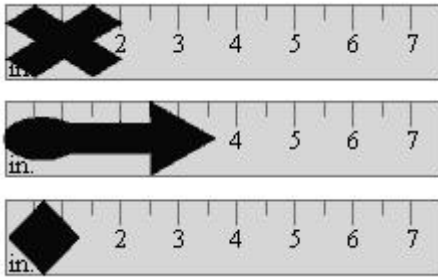
C.







D.

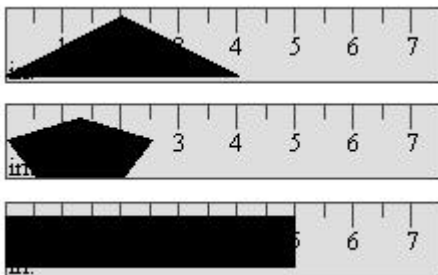






6. Put the objects in order from shortest to longest.



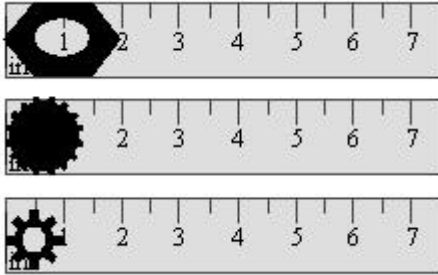
- A.    
 B.    
 C.    
 D. 





7. Put the objects in order from shortest to longest.



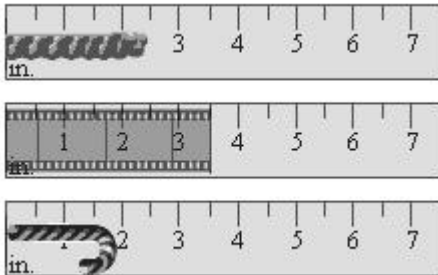
- A.    
 B.    
 C.    
 D. 





8. Put the objects in order from shortest to longest.



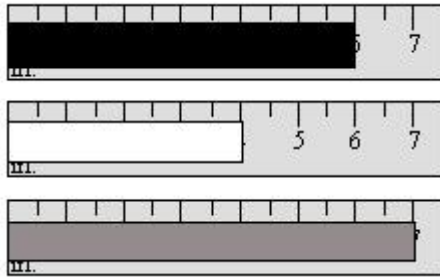
- A.  A. Large gear, small gear, hexagon
- B.  B. Small gear, large gear, hexagon
- C.  C. Hexagon, large gear, small gear
- D.  D. Large gear, hexagon, small gear










9. Put the objects in order from shortest to longest.



- A.  A. Curved object, film strip, coiled object
- B.  B. Curved object, coiled object, film strip
- C.  C. Coiled object, film strip, curved object
- D.  D. Film strip, coiled object, curved object

10. Put the objects in order from shortest to longest.



- A.   
- B.   
- C.   
- D. 